


Directions:

- 1) Represent each of the following situations using Starburst's.
- 2) Draw a diagram inside the box for each column.
- 3) Then write as an algebraic expression.
- 4) Write out the repeated addition.
- 5) Add the expressions.

1) **three** groups of 2 red and 1 yellow




Algebraic Expression: _____

Repeated Addition:

+ _____

Total: _____

2) **two** groups of 1 orange and 5 pink



Algebraic Expression: _____

Repeated Addition:

+ _____

Total: _____

3) **three** groups of 2 orange and 3 yellow



Algebraic Expression: _____

Repeated Addition:

+ _____

Total: _____

4) **two** groups of 5 orange and 3 red




Algebraic Expression: _____

Repeated Addition:

+ _____

Total: _____

5) **twelve** groups of 6 pink and 8 yellow



Algebraic Expression: _____

Repeated Addition:

+ _____

Total: _____

The Distributive Property Let a, b, c be real numbers.		
Words	Algebra	Examples
The product of a and $(b + c)$	$a(b + c) = ab + ac$ $(b + c)a = ba + ca$	$3(4+2) = 3(4) + 3(2)$ $(3 + 5)2 = 3(2) + 5(2)$
The product of a and $(b - c)$	$a(b - c) = ab - ac$ $(b - c)a = ba - ca$	$5(6 - 4) = 5(6) - 5(4)$ $(8 - 6)(4) = 8(4) - 6(4)$

Directions: Please simplify the following expressions by using the distributive property.

1) $3(2y - 5)$

2) $2(8 + h)$

3) $(3 + 3x)(5)$

4) $7(5x + 10)$

5) $2(y - x)$

6) $(5 - 6x)(2)$

7) $2(x + 4) - 3$

8) $4(z + 8) - 3z + 2$

9) $11(2x - 1) + 4(7 - 3x)$

10) $5(c + 3a + 5t) + 8(c + 2a + 3t)$

11) A square has sides of length $3x - 10$.
What is the perimeter of the square?



$3x - 10$

12) Find the area of the rectangle.

$7x - 4$



3

LT #7: I can apply the properties of operations to generate equivalent expressions.
LT #8: I can identify when two expressions are equivalent.

Directions: Apply the distributive property to simplify the following expressions. Find the product of each of the following **using the distributive property**:

1) 14×35

2) $7(70 + 8)$

3) $8(352)$

Directions: Apply the distributive property to simplify the following expressions.

4) $12(z + 7) + 6$

5) $(g - 2)11$

6) $3(5c + 2d + 12)$

7) $3(2x + 4 + 5y) + 10$

8) $7(4p + 6r - b) + 4r + 12p$


Directions: Combine like terms to simplify.

9) $2h + 3b + 6 + 5h - 2b + h$

10) $2xy + x + r + 5xy + 3x$

11) $12 + 3h - 4 + 16y - 2y + 4h$

12) Find the **perimeter** of the square pictured below using the distributive property.



$k + 6$

$k + 6$

Perimeter = _____

13) Find the area and the perimeter of the rectangle pictured below using the distributive property. Don't forget to write the formulas first.

12



$3k + 5$

Area = _____

Perimeter = _____

Bonus:

1) Find the **area and perimeter** of the rectangle pictured below **using the distributive property**.

$k + 1$



$k + 5$